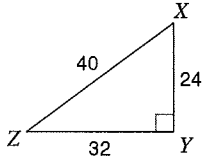


Tangent Ratio Worksheet

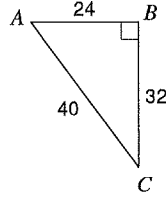
© 2012 Kuta Software LLC. All rights reserved.

Find the value of each trigonometric ratio.

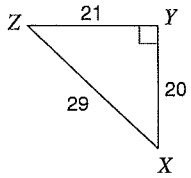
1) $\tan Z$



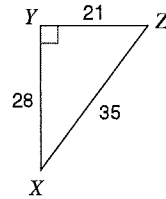
2) $\tan A$



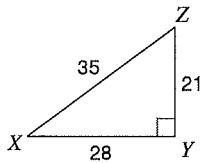
3) $\tan X$



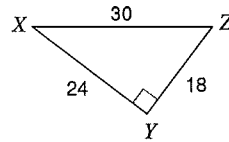
4) $\tan Z$



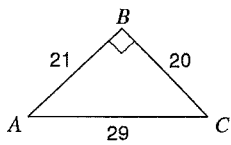
5) $\tan X$



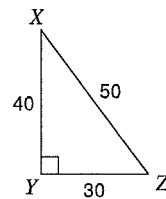
6) $\tan Z$



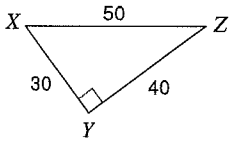
7) $\tan A$



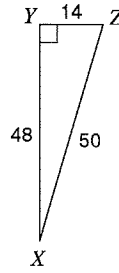
8) $\tan Z$



9) $\tan Z$

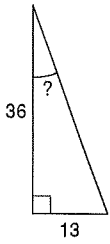


10) $\tan X$

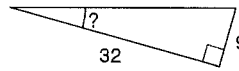


Find the measure of the indicated angle to the nearest degree.

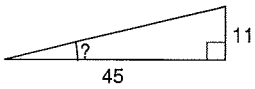
11)



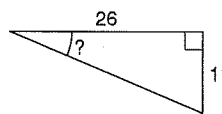
12)



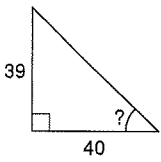
13)



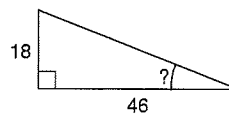
14)



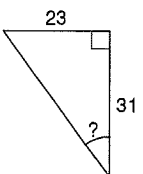
15)



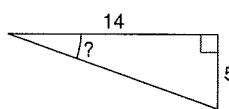
16)

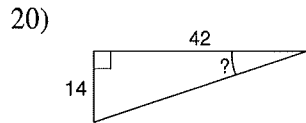
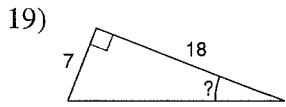


17)



18)





Find the missing side. Round to the nearest tenth.

